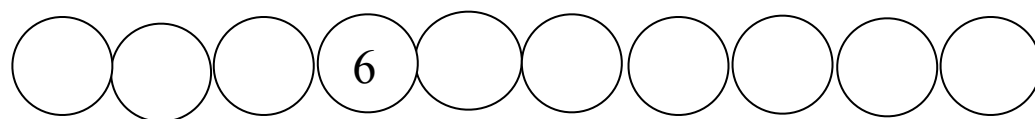
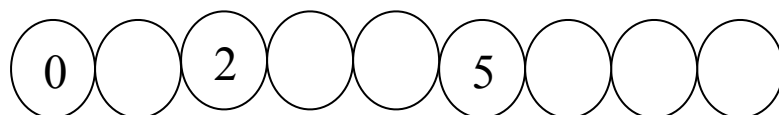


Polročná písomná práca z matematiky - 1. roč.

Meno: _____

1. Doplň číselný rad



2. Porovnaj čísla $> = <$

$6 \bigcirc 8$

$6 \bigcirc 2$

$7 \bigcirc 3$

$4 \bigcirc 4$

$8 \bigcirc 8$

$5 \bigcirc 7$

4. Vypočítaj

$3 + 2 = \underline{\quad}$

$5 - 4 = \underline{\quad}$

$4 + 1 = \underline{\quad}$

$7 - 1 = \underline{\quad}$

$6 + 1 = \underline{\quad}$

$9 - 3 = \underline{\quad}$

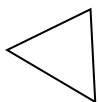
3. Usporiadaj čísla od najmenšieho po najväčší


5, 8, 2, 4, 1 _____

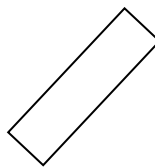
3, 7, 0, 6, 1 _____

4, 6, 1, 8, 3 _____


4. Spočítaj geometrické tvary





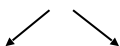




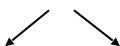


5. Rozklad čísla

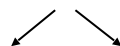
7



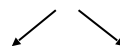
8



6



4



Počet bodov: _____

Hodnotenie: _____

